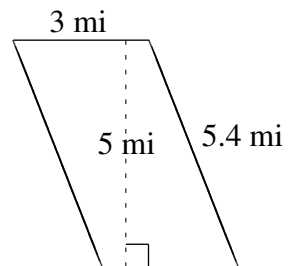
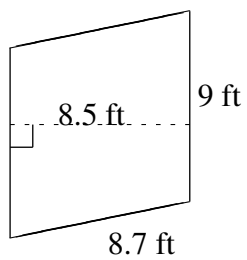
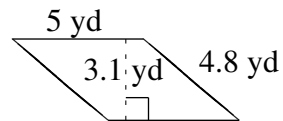
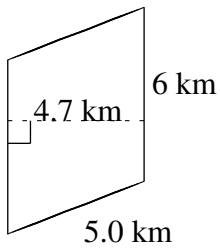
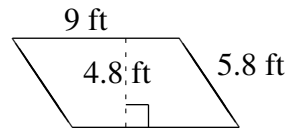
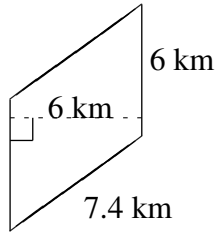


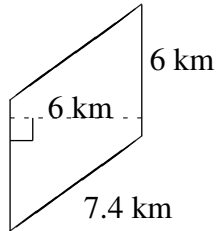
Area and Perimeter of Parallelograms (A)

Find the area and perimeter of each parallelogram.

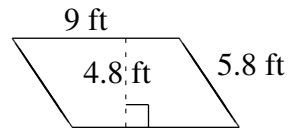


Area and Perimeter of Parallelograms (A) Answers

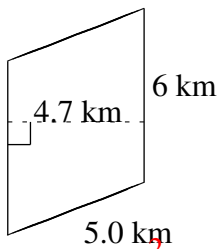
Find the area and perimeter of each parallelogram.



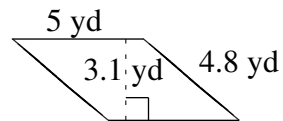
$$A = 36 \text{ km}^2$$
$$P = 26.8 \text{ km}$$



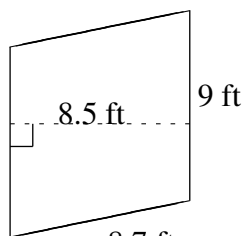
$$A = 43.2 \text{ ft}^2$$
$$P = 29.6 \text{ ft}$$



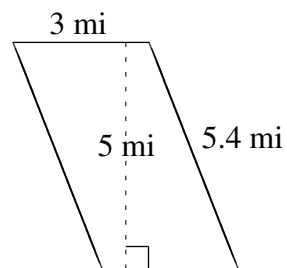
$$A = 28.2 \text{ km}^2$$
$$P = 22.0 \text{ km}$$



$$A = 15.5 \text{ yd}^2$$
$$P = 19.6 \text{ yd}$$



$$A = 76.5 \text{ ft}^2$$
$$P = 35.4 \text{ ft}$$



$$A = 15 \text{ mi}^2$$
$$P = 16.8 \text{ mi}$$